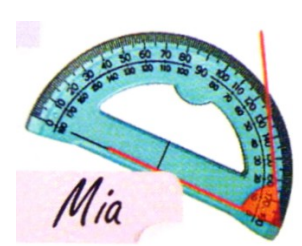
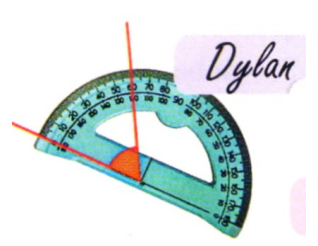
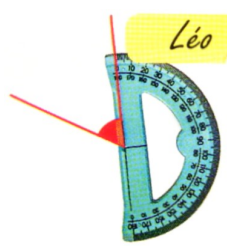



Exercice C18-1 ★ Mesurer un angle

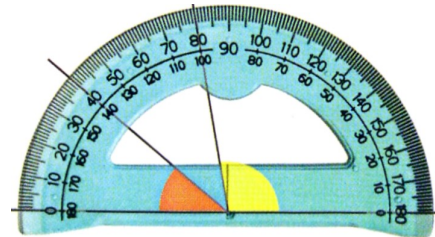
Qui a bien positionné son rapporteur ?



Exercice C18-2 ★ Mesurer un angle

Mesure angle jaune =

Mesure angle orange =



Exercice C18-3 ★ Mesurer un angle

Quelle est la mesure de chacun de ces angles ?



Angle aigu

.....




Angle obtus

.....



Angle aigu

.....



Angle obtus

.....



Angle aigu

.....



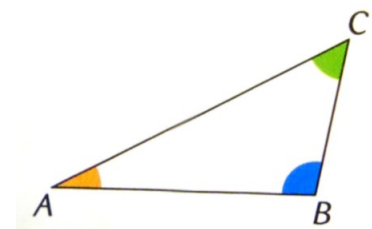
Angle obtus

.....

Exercice C18-4 ★ Mesurer un angle

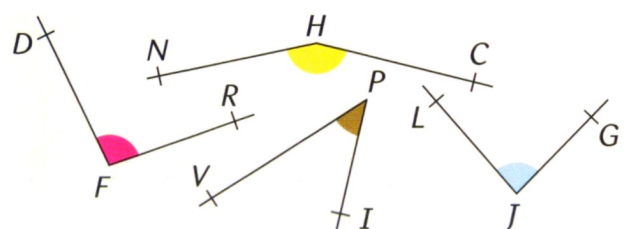
Replacer les bonnes mesures en choisissant
parmi les mesures ci-dessous.

- 51° 7° 28° 101° 160°



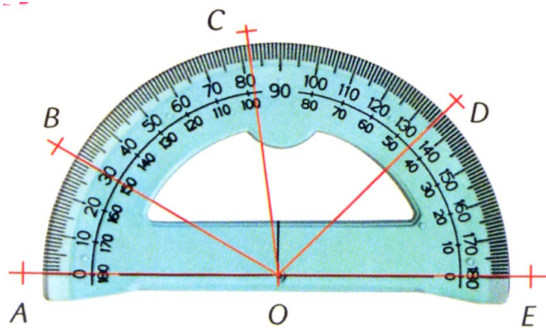
Exercice C18-5 ★ Mesurer un angle

Ranger ces angles
dans l'ordre croissant.

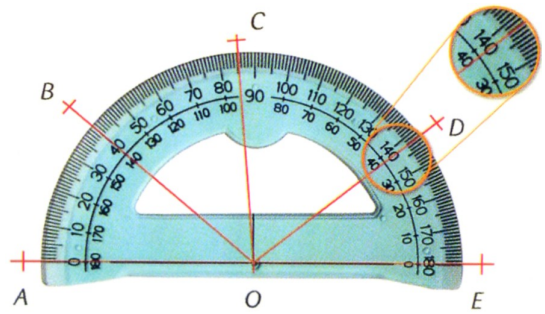


.....

Exercice C18-6 ★★ Mesurer un angle



$\widehat{BOC} = \dots\dots\dots$
 $\widehat{DOC} = \dots\dots\dots$



$\widehat{AOB} = \dots\dots\dots$ $\widehat{BOE} = \dots\dots\dots$
 $\widehat{AOC} = \dots\dots\dots$ $\widehat{EOC} = \dots\dots\dots$
 $\widehat{AOD} = \dots\dots\dots$ $\widehat{EOD} = \dots\dots\dots$

Exercice C18-7 ★ Mesurer un angle

Compléter.

Trace, approximativement et à main levée, les angles suivants dont on donne les mesures.

100°

80°

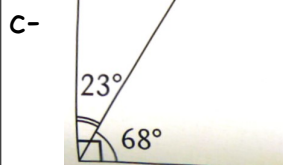
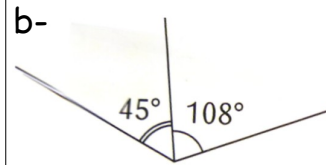
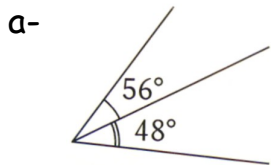
plat

160°

10°

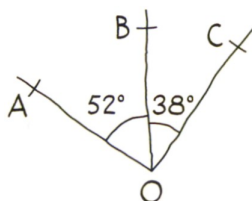
Exercice C18-8 ★★ Mesurer un angle

Dans chaque cas, trouver au moins une anomalie.

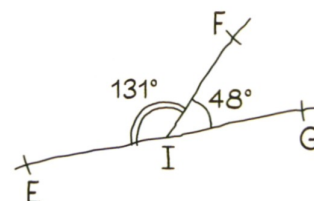


Exercice C18-9 ★★ Mesurer un angle

Quelle est la nature de l'angle \widehat{AOC} ?

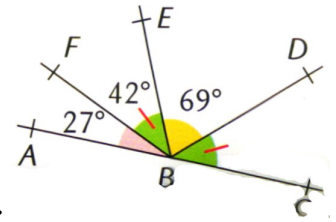


Quelle est la nature de l'angle \widehat{EIG} ?



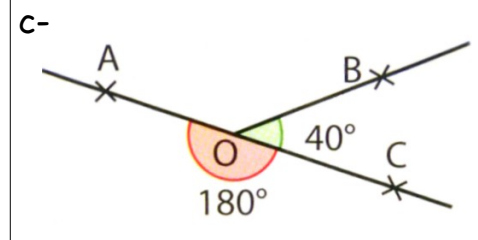
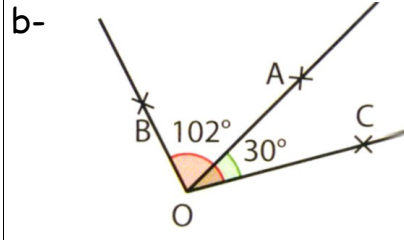
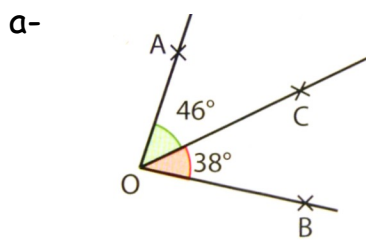
Exercice C18-10 Mesurer un angle

Les points A, B et C sont-ils alignés ?



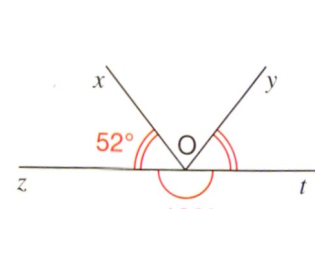
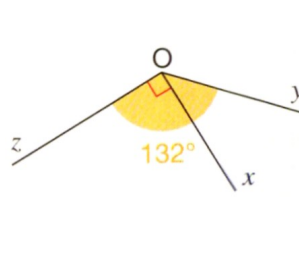
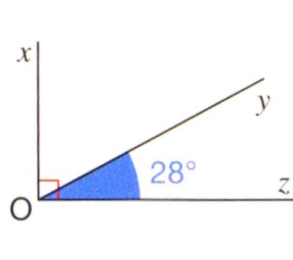
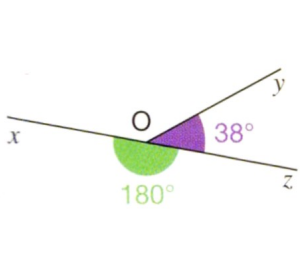
Exercice C18-11 ★★ Mesurer un angle

Dans chaque cas, calculer la mesure de l'angle \widehat{AOB} ?



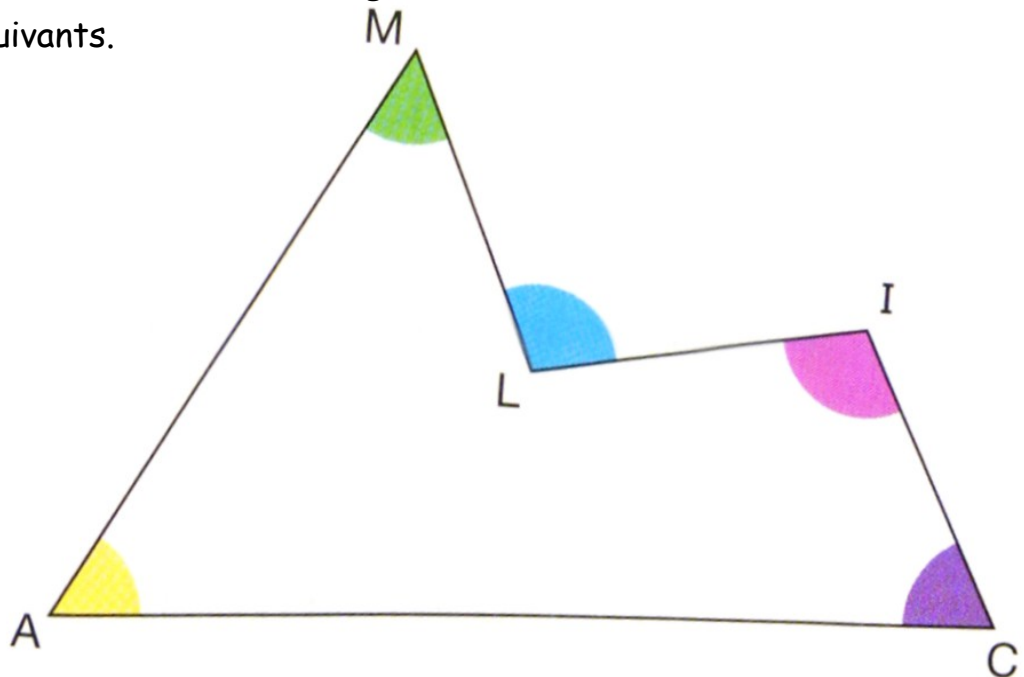
Exercice C18-12 ★★ Mesurer un angle

Dans chaque cas, calculer la mesure de l'angle \widehat{xOy} ?



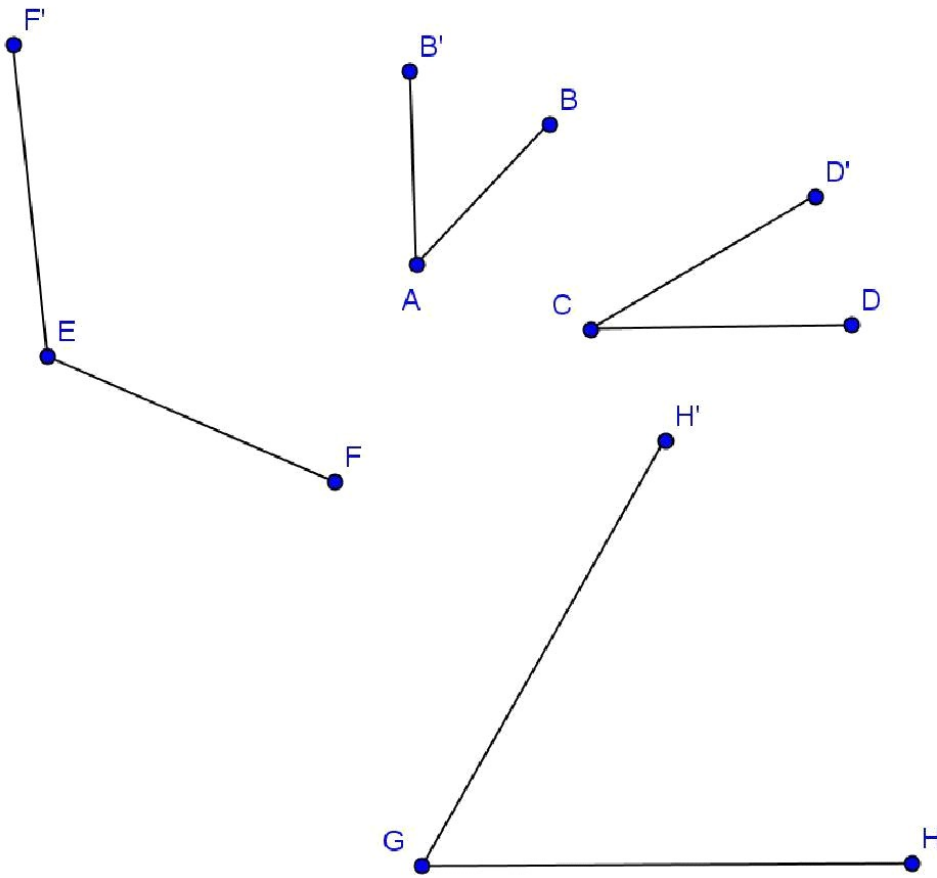
Exercice C18-13 ★★ Mesurer un angle

Mesurer les angles suivants.



Exercice C18-14 ★★★ Mesurer un angle

On sait que l'angle $\widehat{HGH'}$ mesure 60° . Indique la mesure des autres angles.



Exercice C18-15 ★★★ Mesurer un angle

Mesurer les angles suivants.

