


Exercice C28-1 ★

Barrer les noms qui ne correspondent pas à celui de ce quadrilatère.

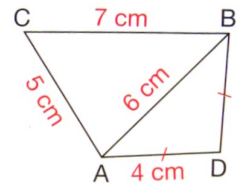
LION - NOIL - ILON - ONIL - IONL - NLIO - LOIN



Exercice C28-2 ★

Lilian veut tracer ce quadrilatère ABCD. Qu'en penser ??

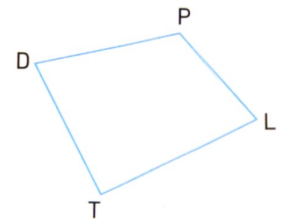
.....



Exercice C28-3 ★

Citer tous les noms possibles de ce quadrilatère.

.....

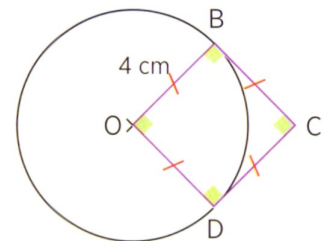


Exercice C28-4 ★★

Quelle est la nature du quadrilatère BCDO ? Justifier.



.....

.....



Exercice C28-5 ★★

Quelle est la nature de ces 2 quadrilatères ? Justifier.



Exercice C28-6 ★★

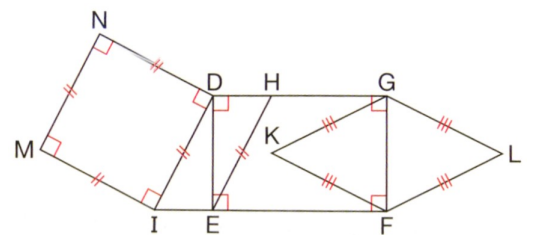
Indiquer la nature des quadrilatères suivants. Justifier.

Justifie.

FLGK :

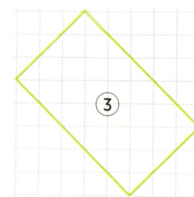
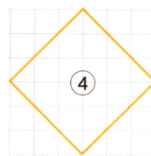
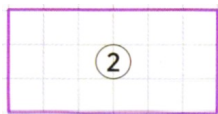
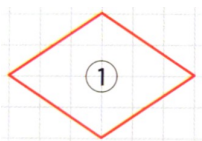
DEFG :

MNDI :



Exercice C28-7 ★★

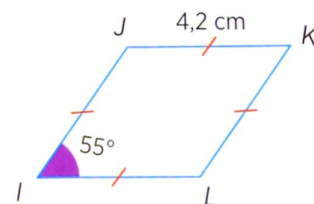
Indiquer la nature des quadrilatères suivants. Justifie.



.....
.....
Donc c'est.....
.....

Exercice C28-8 ★★

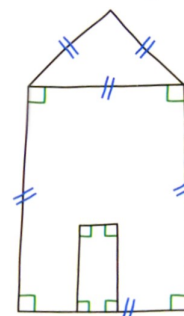
Quelle est la nature de IJKL ? Justifier.



.....

Exercice C28-9 ★★★

1- Quelle est la nature du « toit » ? Justifier.



.....

2- Quelle est la nature de la « porte » ? Justifier.

.....

3- Quelle est la nature de la « façade » ? Justifier.

.....

Chap 28 : Exercices en classe

RECONNAÎTRE DES FIGURES SIMPLES DU PLAN
= NOTION 44 DU LIVRE