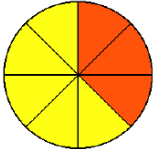

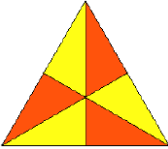
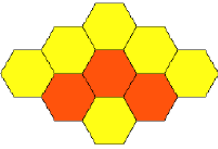


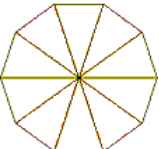
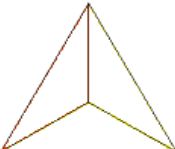
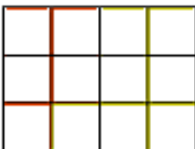
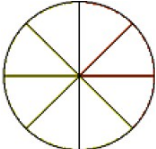
Exercice M32-1

Indique la fraction de figure en couleur.

			
..... ----- ----- ----- -----

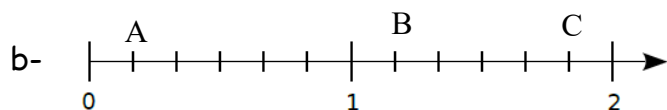
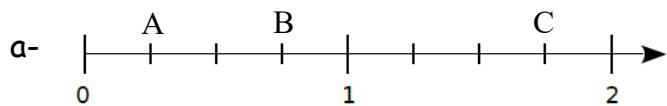
Exercice M32-2

Colorie la fraction de figure indiquée.

			
$\frac{4}{10}$	$\frac{1}{3}$	$\frac{10}{12}$	$\frac{3}{4}$

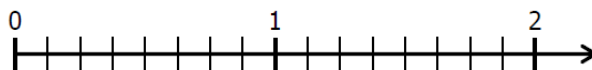
Exercice M32-1

I - Indique l'abscisse de chaque point.



II - Place les points en fonction de leur abscisse.

a- A $(\frac{1}{8})$ B $(\frac{10}{8})$ C $(\frac{16}{8})$



b- A $(\frac{1}{3})$ B $(\frac{5}{3})$ C $(\frac{10}{3})$

